

Name: \_\_\_\_\_

Date: \_\_\_\_\_

Class: \_\_\_\_\_

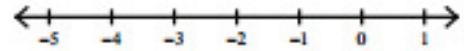
HW #: 17

Solve each inequality and graph its solution.

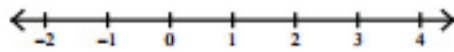
1)  $0 > 3x - 3 - 6$



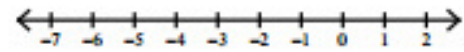
2)  $4x + 1 - 1 \geq -8$



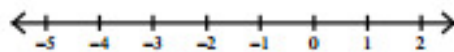
3)  $-1 \leq 2n + 4 - 5$



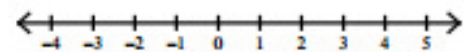
4)  $-6 > 5n + 5 + 4$



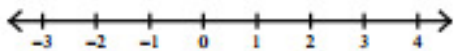
5)  $0 \leq 2n + 3n$



6)  $2p - 4p \leq -2$



7)  $7 < -(-k - 3) + 2$



8)  $3 - 2(n - 4) > -1$



9)  $-5(1 - 4a) > -5$



10)  $-2(b + 1) + 4 < 10$

